


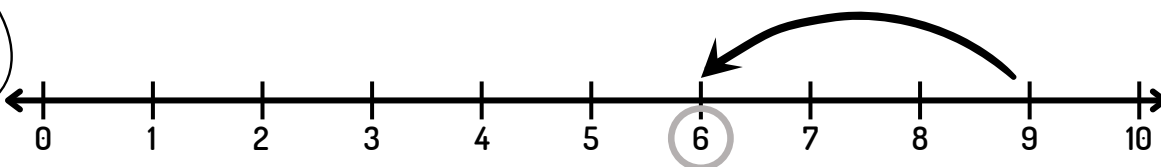
Esegui le sottrazioni sulla linea dei numeri.



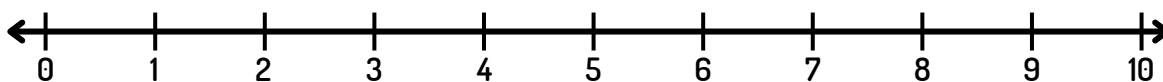
maestralu.altervista.org



$$9 - 3 = \boxed{6}$$



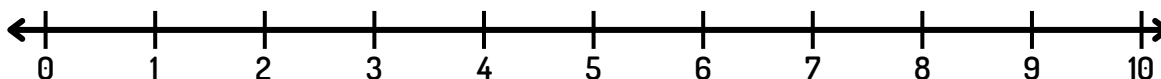
$$8 - 4 = \square$$



$$7 - 2 = \square$$



$$9 - 7 = \square$$



$$10 - 8 = \square$$

