



AGGIUNGI GLI ELEMENTI MANCANTI ED ESEGUI LE ADDIZIONI.




maestralu.altervista.org




$$8 + 2 = \bigcirc$$



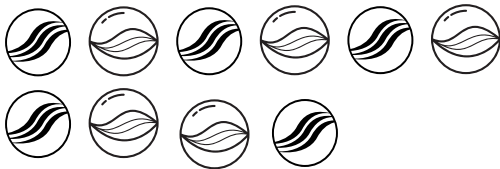
$$8 + 4 = \bigcirc$$




$$7 + 8 = \bigcirc$$



$$12 + 6 = \bigcirc$$



$$9 + 9 = \bigcirc$$



$$12 + 7 = \bigcirc$$

