





OSSERVA L'ESEMPIO E COMPLETA.



$12 + 8 = 20$

$20 - 8 = 12$


$20 - 12 = 8$



$9 + 11 = 20$

$20 - 9 = 11$

$20 - \dots = \dots$



$5 + \dots = 20$

$20 - \dots = \dots$

$\dots - \dots = \dots$

OSSERVA L'ESEMPIO E COMPLETA GLI SCHEMI.

