


# Scomponi il numero in decine e unità

15

decine	unità



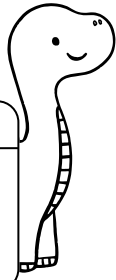
11

decine	unità



13

decine	unità



18

decine	unità



12

decine	unità




20

decine	unità




19

decine	unità




16

decine	unità



14

decine	unità



17

decine	unità

