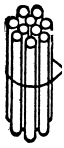


Conta i fascetti e le cannuce, poi scrivi il numero

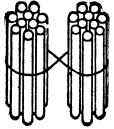


maestralu.altervista.org

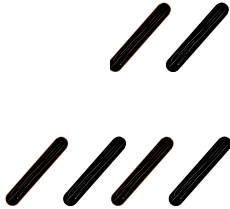
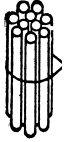
10



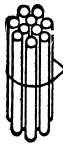
$$\boxed{10} + \boxed{4} = \boxed{14}$$



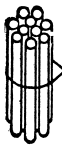
$$\boxed{} + \boxed{} = \boxed{}$$



$$\boxed{} + \boxed{} = \boxed{}$$



$$\boxed{} + \boxed{} = \boxed{}$$



$$\boxed{} + \boxed{} = \boxed{}$$

