

NOME _____

DATA _____

CLASSE _____

VERIFICHE PRIMO QUADRIMESTRE CLASSE PRIMA A. S. :.....

1 RISCRIVI I I NUMERI IN ORDINE CRESCENTE

| | | | | |
|---|---|---|---|---|
| 4 | 1 | 7 | 3 | 9 |
|---|---|---|---|---|

| | | | | |
|--|--|--|--|--|
| | | | | |
|--|--|--|--|--|

2 RISCRIVI I I NUMERI IN ORDINE DECRESCENTE

| | | | | |
|---|---|---|---|---|
| 8 | 2 | 9 | 5 | 6 |
|---|---|---|---|---|

| | | | | |
|--|--|--|--|--|
| | | | | |
|--|--|--|--|--|

3 COMPLETA CON I NUMERI MANCANTI

| | | | | | | | | | | | | |
|---|---|---|---|--|---|--|---|---|---|--|---|---|
| 3 | → | 4 | → | | → | | → | 7 | → | | → | 9 |
|---|---|---|---|--|---|--|---|---|---|--|---|---|

| | | | | | | | | | | | | |
|----|---|--|---|--|---|---|---|--|---|--|---|---|
| 10 | → | | → | | → | 7 | → | | → | | → | 4 |
|----|---|--|---|--|---|---|---|--|---|--|---|---|

| | | | | | | | | | | | | |
|---|---|--|---|--|---|--|---|---|---|--|---|---|
| 1 | → | | → | | → | | → | 5 | → | | → | 7 |
|---|---|--|---|--|---|--|---|---|---|--|---|---|

4 IN OGNI COPPIA CERCHIA IL NUMERO PIU' GRANDE

| | |
|---|---|
| 9 | 5 |
|---|---|

| | |
|---|---|
| 7 | 4 |
|---|---|

| | |
|---|---|
| 8 | 3 |
|---|---|

VERIFICHE PRIMO QUADRIMESTRE CLASSE PRIMA A. S.

1 INSERISCI IL SEGNO MAGGIORE, MINORE, UGUALE



4 ○ 6

3 ○ 2

8 ○ 6

9 ○ 9

9 ○ 5

6 ○ 6

1 ○ 6

7 ○ 10

2 ○ 5





2 SCRIVI IL NUMERO PRECEDENTE E QUELLO SUCCESSIVO

| | | |
|--|----------|--|
| | 1 | |
| | 5 | |
| | 9 | |

| | | |
|--|----------|--|
| | 8 | |
| | 3 | |
| | 7 | |


| | | |
|--|----------|--|
| | 2 | |
| | 6 | |
| | 4 | |


2 COLLEGA IL NUMERO ALLE MANI



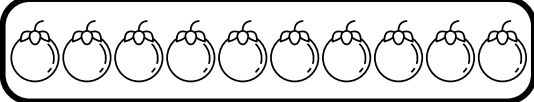
VERIFICHE PRIMO QUADRIMESTRE CLASSE PRIMA A. S.

1 COLORA COME INDICATO DAL NUMERO


5 


3 


7 

6 

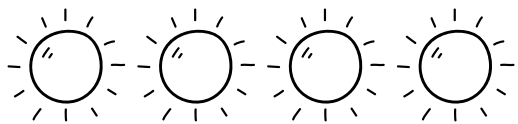
9 

8 

4 


2 

2 CONTA E SCRIVI IL NUMERO

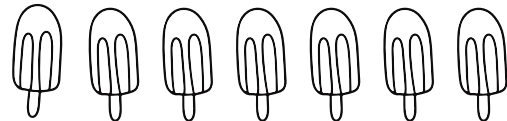




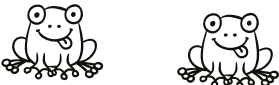












3 CONTA E COLORA IL NUMERO CORRISPONDENTE ALLA QUANTITA'


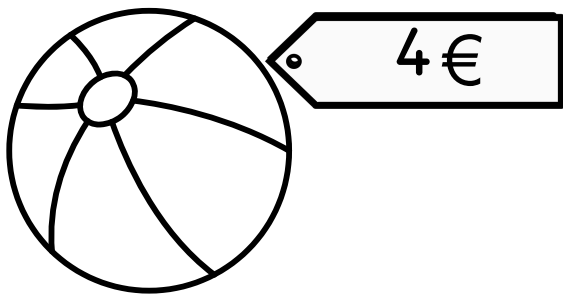
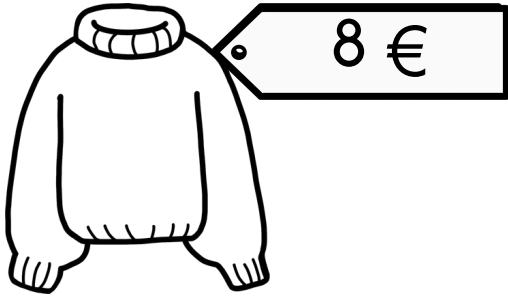
| | |
|--|----------|
|  | 5 |
|  | 7 |
|  | 6 |

| | |
|---|----------|
|  | 7 |
| | 8 |
| | 9 |

| | |
|---|----------|
|  | 4 |
| | 5 |
| | 8 |

VERIFICHE PRIMO QUADRIMESTRE CLASSE PRIMA A. S.

1 DISEGNA LE MONETE E LE BANCONOTE CHE SERVONO PER FORMARE IL PREZZO INDICATO DAL CARTELLINO.



2 CONTA LE MONETE E SCRIVI QUANTI SOLDI HAI.

