

SCRIVI TUTTI I RISULTATI NEL MINOR TEMPO POSSIBILE.

$5 \times \dots = 15$

$10 \times \dots = 40$


$\dots \times 3 = 12$

$6 \times \dots = 30$

$\dots \times 4 = 4$

$\dots \times 3 = 30$

$2 \times \dots = 14$



$8 \times \dots = 40$

$2 \times \dots = 10$

$\dots \times 9 = 45$

$9 \times \dots = 9$

$5 \times \dots = 25$

$4 \times \dots = 24$

$\dots \times 6 = 24$

$\dots \times 7 = 21$

$4 \times \dots = 36$


$\dots \times 5 = 40$

$2 \times \dots = 16$

$7 \times \dots = 28$

$\dots \times 6 = 12$

$9 \times \dots = 27$



$\dots \times 6 = 18$

$\dots \times 4 = 28$


$\dots \times 8 = 24$

$9 \times \dots = 45$

$\dots \times 7 = 28$

$3 \times \dots = 18$

$9 \times \dots = 27$



$2 \times \dots = 20$

$6 \times \dots = 6$

$2 \times \dots = 8$

$5 \times \dots = 35$

$7 \times \dots = 21$

$\dots \times 3 = 24$

$5 \times \dots = 25$

