


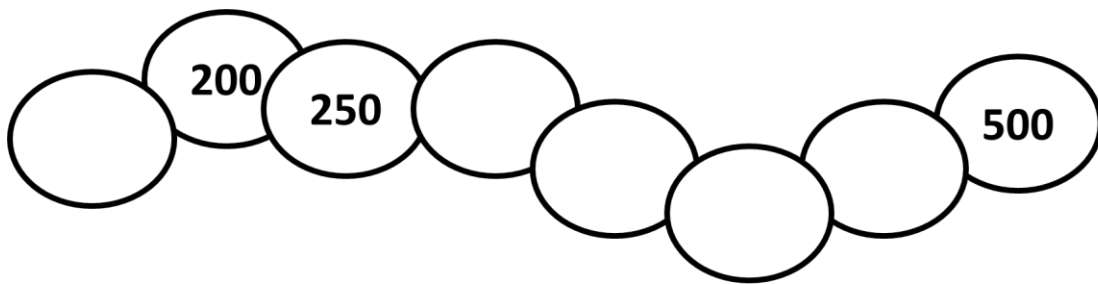


① Completa le linee dei numeri.



② Esegui i seguenti calcoli in riga

$27 + 122 = \underline{\hspace{2cm}}$

$340 + 100 = \underline{\hspace{2cm}}$

$30 + 150 = \underline{\hspace{2cm}}$

$460 - 30 = \underline{\hspace{2cm}}$

$643 - 231 = \underline{\hspace{2cm}}$

$987 - 564 = \underline{\hspace{2cm}}$

$745 - 10 = \underline{\hspace{2cm}}$

$853 - 100 = \underline{\hspace{2cm}}$

$645 - 40 = \underline{\hspace{2cm}}$

