

① Colora come indicato dalla frazione.

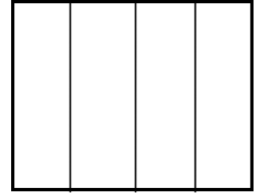
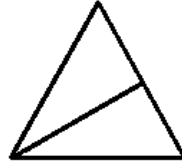
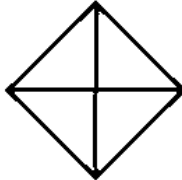
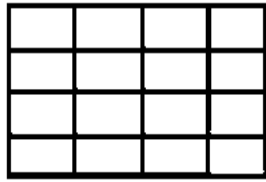
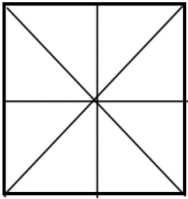
$$\frac{3}{8}$$

$$\frac{7}{16}$$

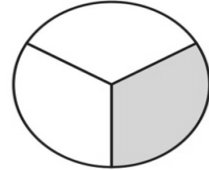
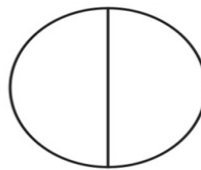
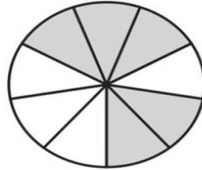
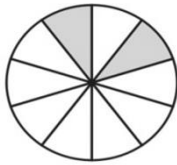
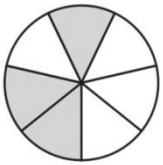
$$\frac{3}{4}$$

$$\frac{1}{2}$$

$$\frac{2}{4}$$



② Scrivi la frazione rappresentata dal disegno.



\_\_\_\_\_

\_\_\_\_\_

\_\_\_\_\_

\_\_\_\_\_

\_\_\_\_\_

③ Risolvi il problema sul quaderno.

Sul suo albero di Natale Marta ha appeso in tutto 78 palline.

Il  $\frac{2}{3}$  sono rosse, mentre le altre palline sono dorate.

Calcola quante palline rosse e dorate Marta ha messo sull'albero.

