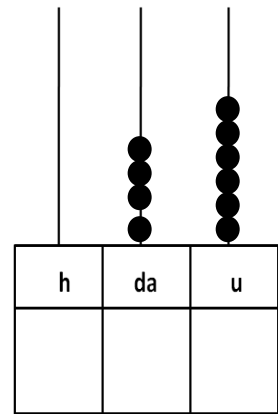
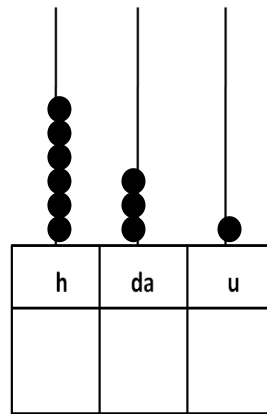
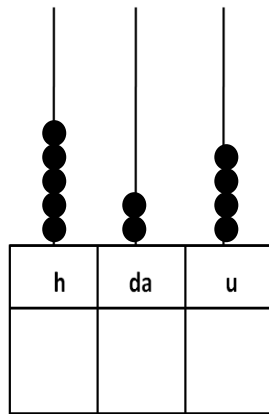
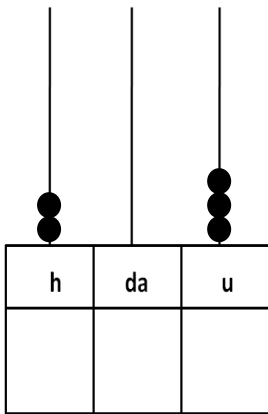




Scrivi i numeri rappresentati sull'abaco.



Scomponi i numeri come nell'esempio.


$456 = 4 \text{ h} + 5 \text{ da} + 6 \text{ u} = 400 + 50 + 6$

$792 = \text{-----}$

$938 = \text{-----}$

$555 = \text{-----}$

$201 = \text{-----}$



Inserisci il segno >, <, =.

	segno	
135		455
647		328
924		654
547		574
293		836
532		123
719		415
860		860
902		1000
345		346



Completa la tabella.

precedente	Numero di partenza	di	successivo
	873		
	246		
	689		
	394		
	827		
	393		
	500		
	999		
	119		
	724		