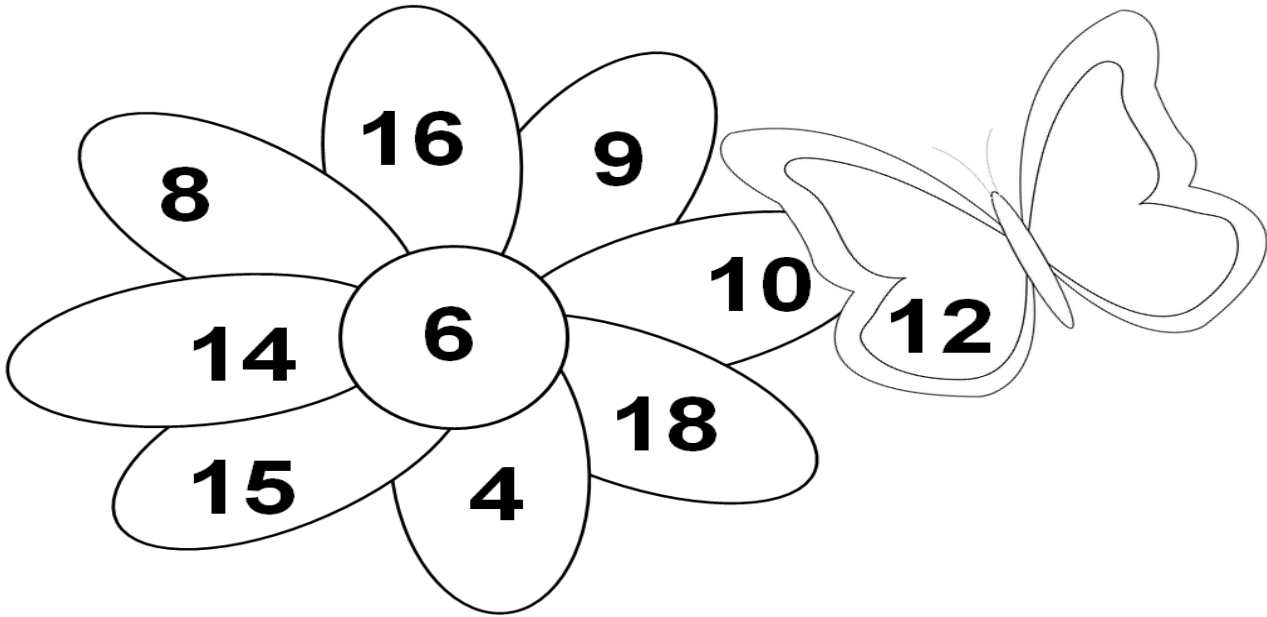
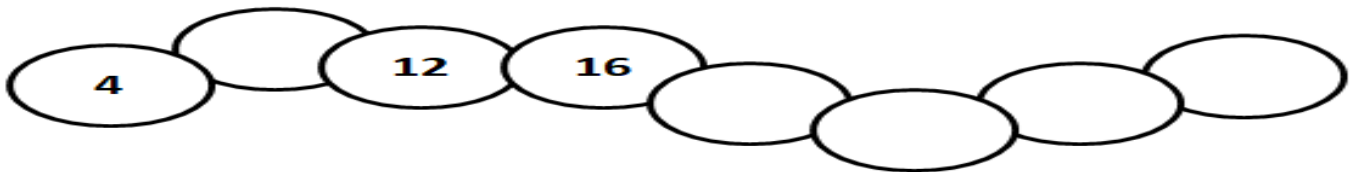
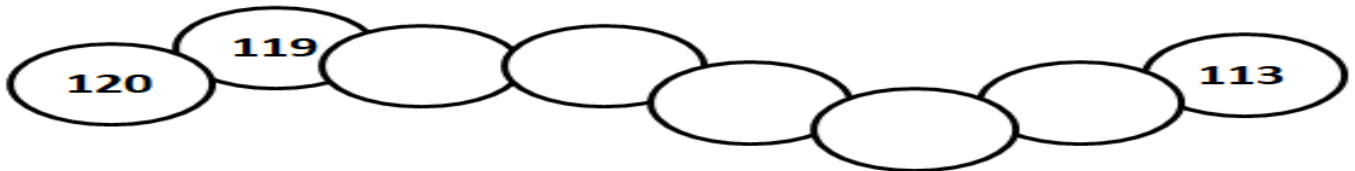
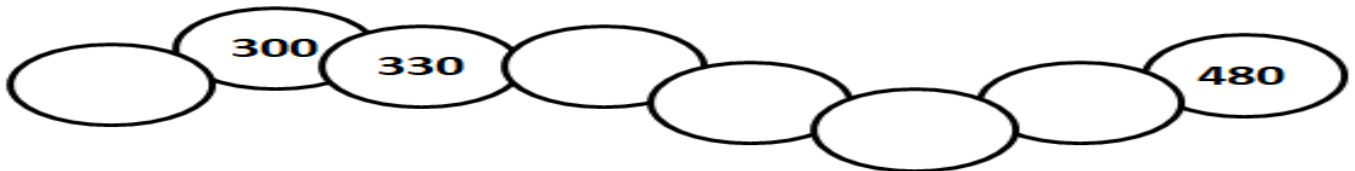


① Colora di rosa i risultati della tabellina del 2, di azzurro quelli della tabellina del 3, di giallo quelli con i risultati comuni alla tabellina del 2 e del 3.



② Completa le linee dei numeri.



③ Esegui i seguenti calcoli in riga

$27 + 422 = \underline{\hspace{2cm}}$

$290 + 100 = \underline{\hspace{2cm}}$

$20 + 150 = \underline{\hspace{2cm}}$

$560 - 30 = \underline{\hspace{2cm}}$

$356 - 234 = \underline{\hspace{2cm}}$

$987 - 356 = \underline{\hspace{2cm}}$

$798 - 10 = \underline{\hspace{2cm}}$

$653 - 100 = \underline{\hspace{2cm}}$

$645 - 20 = \underline{\hspace{2cm}}$

