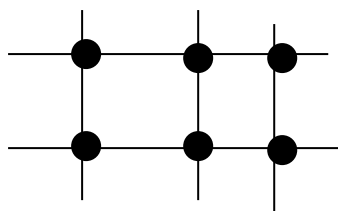



① Completa gli incroci e poi scrivi la moltiplicazione come nell'esempio



Moltiplicazioni:

$$3 \times 2 = 6$$


$$2 \times 3 = 6$$



Moltiplicazioni:

$$\underline{\quad} \times \underline{\quad} = \underline{\quad}$$

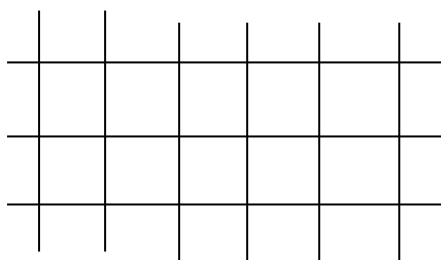
$$\underline{\quad} \times \underline{\quad} = \underline{\quad}$$



Moltiplicazioni:

$$\underline{\quad} \times \underline{\quad} = \underline{\quad}$$

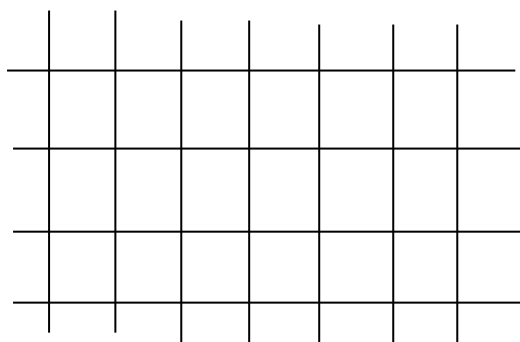
$$\underline{\quad} \times \underline{\quad} = \underline{\quad}$$



Moltiplicazioni:

$$\underline{\quad} \times \underline{\quad} = \underline{\quad}$$

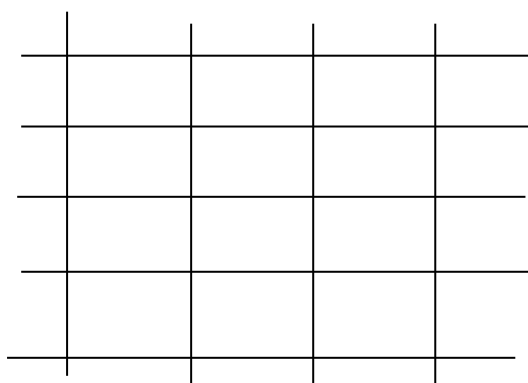
$$\underline{\quad} \times \underline{\quad} = \underline{\quad}$$



Moltiplicazioni:

$$\underline{\quad} \times \underline{\quad} = \underline{\quad}$$

$$\underline{\quad} \times \underline{\quad} = \underline{\quad}$$



Moltiplicazioni:

$$\underline{\quad} \times \underline{\quad} = \underline{\quad}$$

$$\underline{\quad} \times \underline{\quad} = \underline{\quad}$$