



① Osserva gli schieramenti e scrivi la moltiplicazione (disegna le righe e le colonne).



Moltiplicazioni:

$$\underline{\quad} \times \underline{\quad} = \underline{\quad}$$


$$\underline{\quad} \times \underline{\quad} = \underline{\quad}$$



Moltiplicazioni:

$$\underline{\quad} \times \underline{\quad} = \underline{\quad}$$


$$\underline{\quad} \times \underline{\quad} = \underline{\quad}$$



Moltiplicazioni:

$$\underline{\quad} \times \underline{\quad} = \underline{\quad}$$


$$\underline{\quad} \times \underline{\quad} = \underline{\quad}$$



Moltiplicazioni:

$$\underline{\quad} \times \underline{\quad} = \underline{\quad}$$


$$\underline{\quad} \times \underline{\quad} = \underline{\quad}$$



Moltiplicazioni:

$$\underline{\quad} \times \underline{\quad} = \underline{\quad}$$

$$\underline{\quad} \times \underline{\quad} = \underline{\quad}$$



Moltiplicazioni:

$$\underline{\quad} \times \underline{\quad} = \underline{\quad}$$

$$\underline{\quad} \times \underline{\quad} = \underline{\quad}$$