

① Quale, tra queste figure, corrisponde alla descrizione “E’ un cerchio dentro un quadrato”?

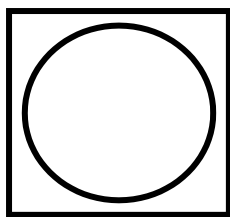


Figura 1

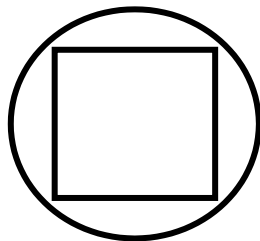


Figura 2

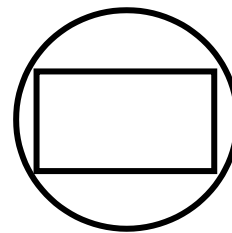


Figura 3

A. Figura 1

B. Figura 2

C. Figura 3

② Marta si guarda allo specchio. Cerchia la figura che rappresenta la situazione.




Figura 1




Figura 2




Figura 3



Figura 4