

① **Completa la tabella**

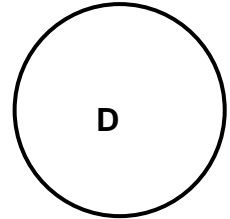
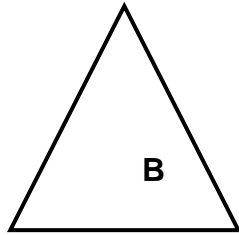
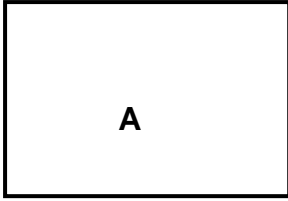


Figura	Numero lati	Numero angoli
A Rettangolo		
B		
C		
D		

②

Rispondi alle domande

Come si chiama questo solido? _____

Quante facce ha? _____

Quanti spigoli ha? _____

Quali figure formano le sue facce? _____

③ **Riproduci il triangolo sulla griglia.**

