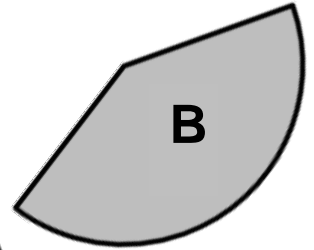
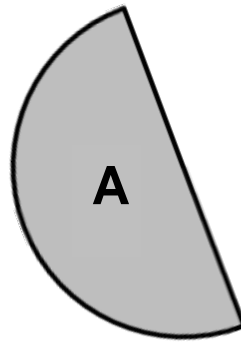
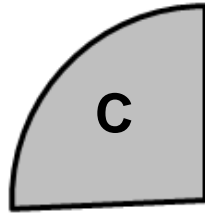
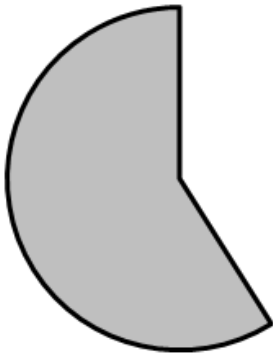


① Dalla figura qui sotto manca un pezzo. Con quale di questi pezzi puoi completarla?



A

B.

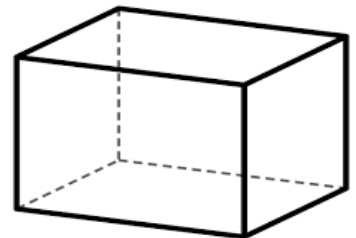
C.

② Come si chiama questo solido? _____

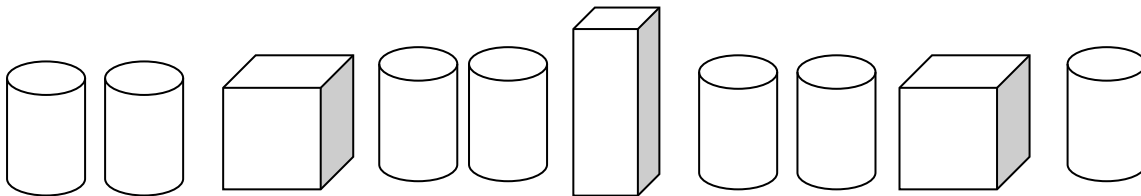
Quante facce ha? _____

Quanti spigoli ha? _____

Quali figure formano le sue facce? _____



③ Osserva questa serie di figure:



Cosa manca per completare la serie?

A 1 cilindro e 1 cubo

B 1 Parallelepipedo

C 1 cilindro e 1 parallelepipedo

④ Quanti quadrati vedi in questa immagine?

A 1

B 4

C 5

