

① Completa la figura B in modo da farla diventare uguale alla figura A.

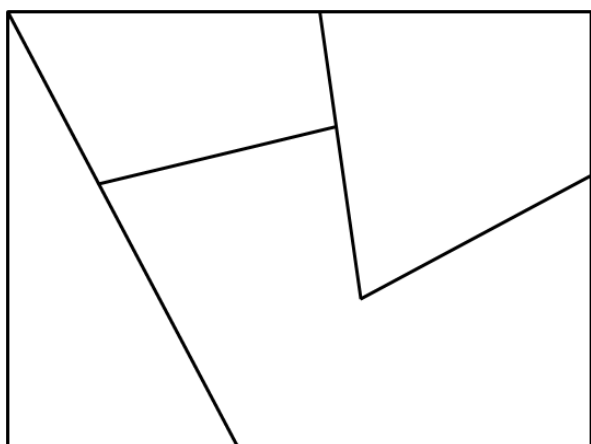


Figura A

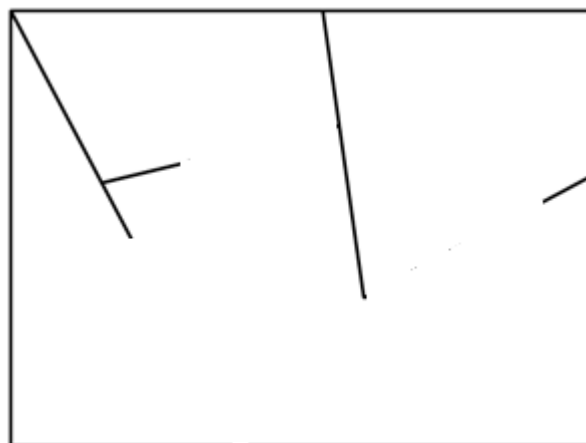
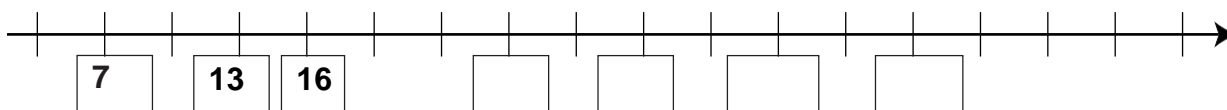
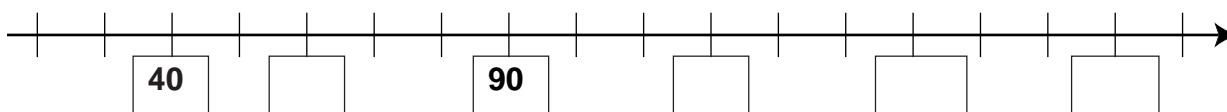
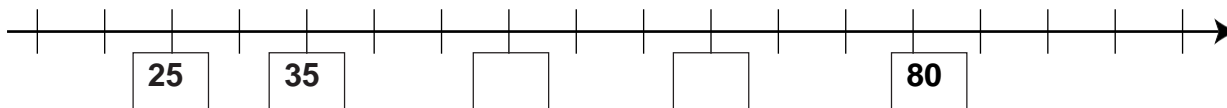


Figura B

② Completa le linee dei numeri con i numeri mancanti



③ Forma i numeri con le cifre indicate

	Numero maggiore	Numero minore
7 - 0 - 5		
6 - 4 - 81		
5 - 3 - 2		
4 - 3 - 3		



④ Esegui i calcoli in colonna

$134 + 456 =$

$654 + 236 =$

$657 + 120 =$

$876 + 9 =$

$452 + 397 =$

$357 + 336 =$

$985 - 435 =$

$976 - 564 =$

$538 - 234 =$

$862 - 96 =$